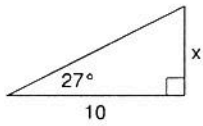


Using Trigonometry To Find Lengths

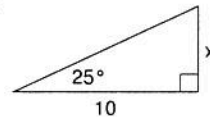
Find the missing side. Round to the nearest tenth.

1)



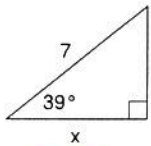
5.1

2)



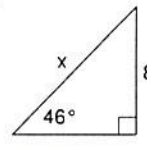
4.7

3)



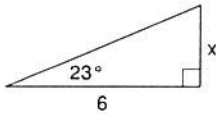
5.4

4)



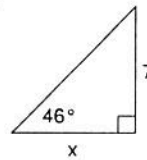
11.1

5)



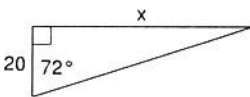
2.5

6)



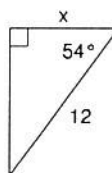
6.8

7)



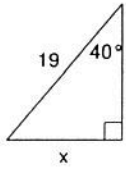
61.6

8)



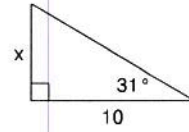
7.1

9)



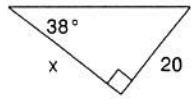
12.2

10)



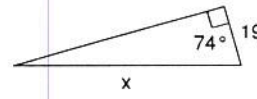
6.0

11)



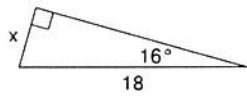
25.6

12)



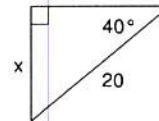
68.9

13)



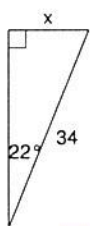
5.0

14)



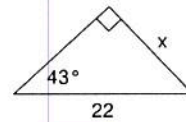
12.9

15)



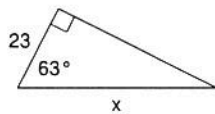
12.7

16)



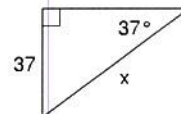
15.0

17)



50.7

18)



61.5